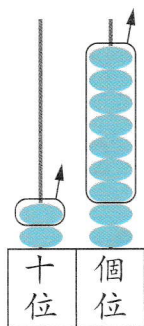


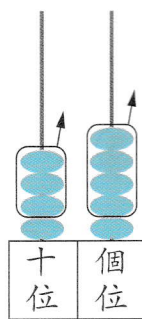
看算柱填答案。

①  $29 - 17 =$



$$\begin{array}{r} 29 \\ - 17 \\ \hline 12 \end{array}$$

②  $45 - 34 =$



$$\begin{array}{r} 45 \\ - 34 \\ \hline 11 \end{array}$$

算算看。

③ 
$$\begin{array}{r} 40 \\ - 10 \\ \hline 30 \end{array}$$

④ 
$$\begin{array}{r} 66 \\ - 30 \\ \hline 36 \end{array}$$

⑤ 
$$\begin{array}{r} 87 \\ - 80 \\ \hline 7 \end{array}$$

⑥  $34 - 33 =$

⑦  $75 - 52 =$

⑧  $59 - 13 =$

⑨  $42 - 22 =$

⑩  $7 - 2 =$

⑪  $8 - 4 =$

$70 - 20 =$

$80 - 40 =$

$77 - 22 =$

$88 - 44 =$

列式計算。

- ⑫ 雞蛋 27 隻，  
用去 14 隻，  
還有雞蛋多少隻？

還有雞蛋：


$$\begin{array}{r} \boxed{27} - \boxed{14} \\ = \boxed{13} \text{ (隻)} \end{array}$$

$$\begin{array}{r} \boxed{27} \\ - \boxed{14} \\ \hline \boxed{13} \end{array}$$

- ⑬ 羊 38 隻，  
牛 13 隻，  
羊比牛多幾隻？

羊比牛多：


$$\begin{array}{r} 38 - 13 \\ \hline = \boxed{25} \text{ (隻)} \end{array}$$


$$\begin{array}{r} 38 \\ - 13 \\ \hline 25 \end{array}$$

- ⑭ 樂樂有 16 粒波子，  
思思有 10 粒波子，  
思思有的波子比樂樂有的少幾粒？

思思有的波子比樂樂有的少：

$$\begin{array}{r} 16 - 10 \\ \hline = \boxed{6} \text{ (粒)} \end{array}$$


$$\begin{array}{r} 16 \\ - 10 \\ \hline 6 \end{array}$$