

5

數的基本組合(6—8)

姓名： _____

班別： _____ 日期： _____

我答對了：



0-3 題



4-6 題

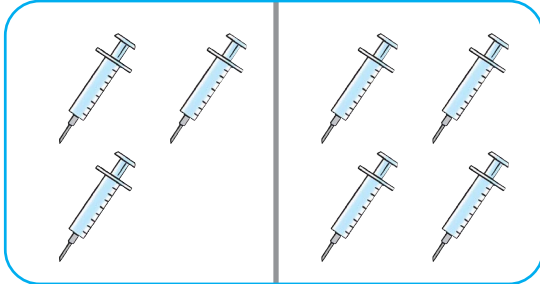


7-9 題

數一數、填一填。

針筒

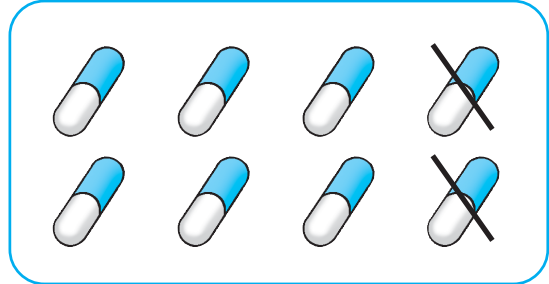
1



$$3 + 4 = \boxed{7}$$

藥丸

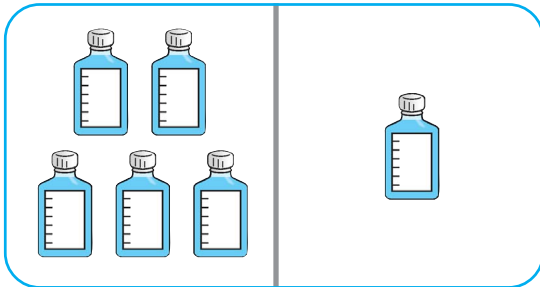
2



$$8 - 2 = \boxed{6}$$

藥水瓶

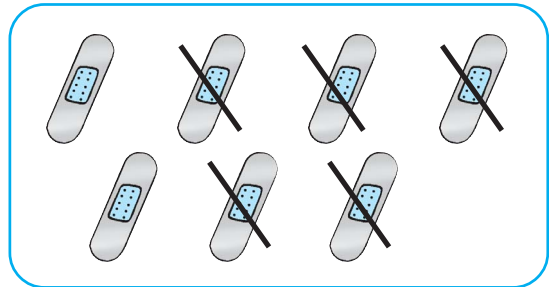
3



$$5 + \boxed{1} = \boxed{6}$$

膠布

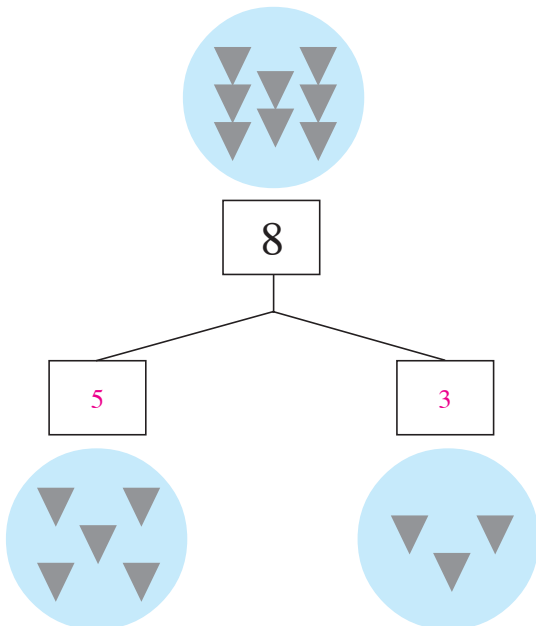
4



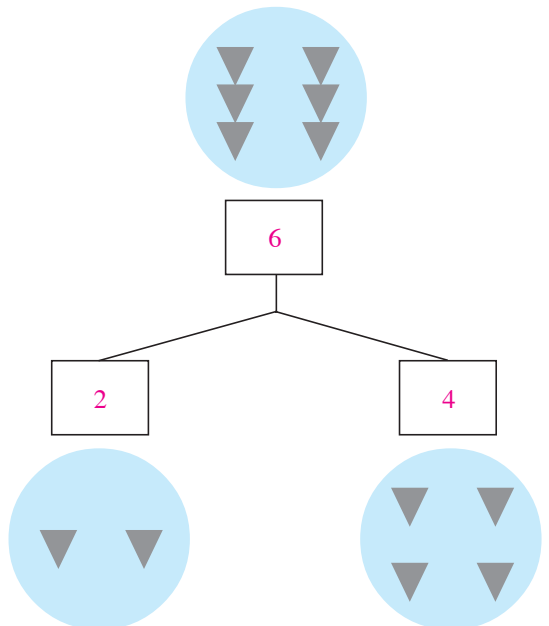
$$7 - \boxed{5} = \boxed{2}$$

依圖意在空格內填上適當的數。

5




6



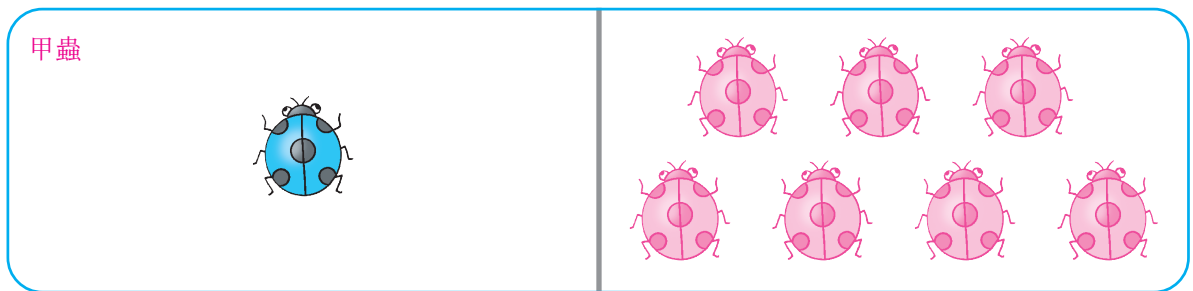
從貼紙頁中取出適量的昆蟲圖，依指示貼在空位內，然後填填看。

7 的基本組合




$$4 + 3 = 7$$
$$7 - \boxed{3} = 4$$

8 的基本組合



$$1 + \boxed{7} = 8$$
$$8 - 7 = \boxed{1}$$

6 的基本組合



$$\boxed{2} + 4 = 6$$
$$6 - 4 = \boxed{2}$$