




1 倍數

姓名：_____

班別：_____ 日期：_____

我答對了：

 0-4 題  5-9 題  10-13 題

填填看。

1 $4 + 4 + 4$

$= 4 \times \boxed{3}$

$= \boxed{12}$

4 的 3 倍是 12。

2 $8 + 8 + 8 + 8 + 8 + 8 + 8$

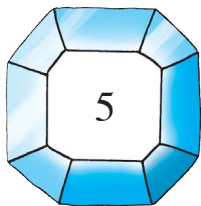
$= 8 \times \boxed{7}$

$= \boxed{56}$


8 的 7 倍是 56。

依指示完成下列各題。

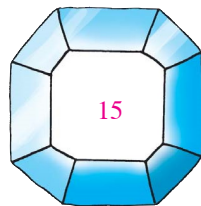
3 列出 5 的最初十個倍數：



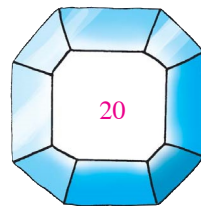
,



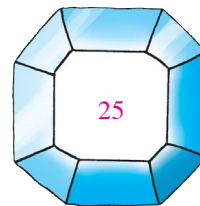
,



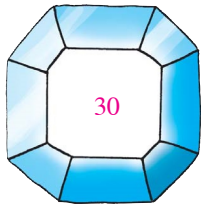
,



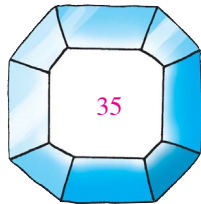
,



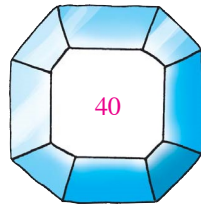
,



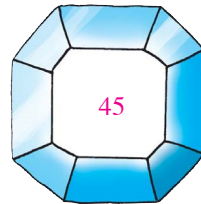
,



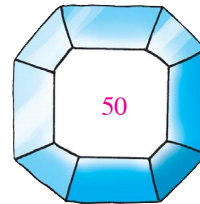
,




,



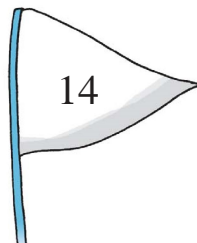
,



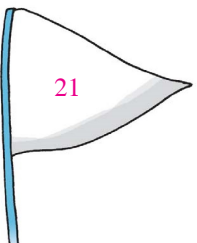
4 列出 7 的最初十個倍數：



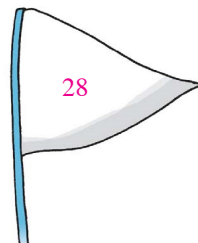
,



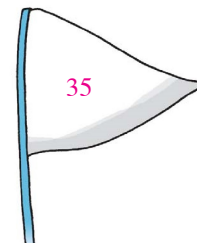
,



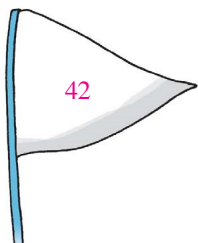
,



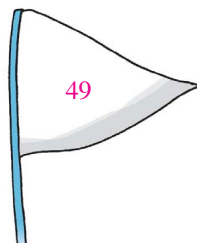
,



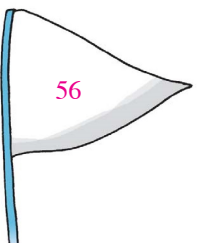
,



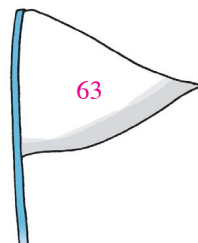
,



,



,



,

