

5

減法(一)

姓名：_____

班別：_____ 日期：_____

我答對了：



0-4 題




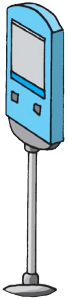
5-8 題




9-12 題

計算各題，從貼紙頁中取出適當的汽車，貼在空格內。


1 $8880 - 7480$




2 $9568 - 8446$




3 $4531 - 3230$



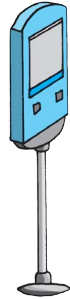

4 $5548 - 3115$




5 $5693 - 2609$




6 $4435 - 1375$



7 $8388 - 4972$



8 $9284 - 7881$



列式計算下列各題。

- 9 博物館上午有 3570 名遊客參觀，下午只有 2130 名遊客參觀。上午比下午多幾名遊客參觀？

上午比下午多：

$$\begin{array}{r} \boxed{3570} - \boxed{2130} \\ = \boxed{1440} \text{ (名)} \end{array}$$

上午	3570 (名)
下午	2130 (名)
上午比下午多	$3570 - 2130$ (名)

$$\begin{array}{r} \boxed{3570} \\ - \boxed{2130} \\ \hline \boxed{1440} \end{array}$$

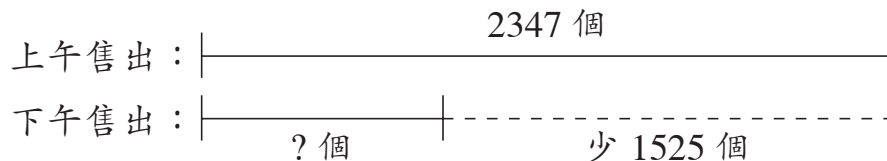
- 10 農場有 4683 棵白菜，被蟲蛀去 1371 棵，還剩白菜多少棵？

還剩白菜：

$$\begin{array}{r} 4683 - 1371 \\ \hline = 3312 \text{ (棵)} \end{array}$$

$$\begin{array}{r} 4683 \\ - 1371 \\ \hline 3312 \end{array}$$

- 11 麵包店上午售出 2347 個麵包，下午比上午少售出 1525 個。下午售出麵包多少個？



下午售出麵包：

$$\begin{array}{r} 2347 - 1525 \\ \hline = 822 \text{ (個)} \end{array}$$

$$\begin{array}{r} 2347 \\ - 1525 \\ \hline 822 \end{array}$$

- 12 海獅公園上週有 4578 人入場，本週有 7593 人入場。上週比本週少幾人入場？

上週比本週少：

$$\begin{array}{r} 7593 - 4578 \\ \hline = 3015 \text{ (人)} \end{array}$$

上週	4578 (人)
本週	7593 (人)
上週比本週少	$7593 - 4578$ (人)

$$\begin{array}{r} 7593 \\ - 4578 \\ \hline 3015 \end{array}$$