

3

加法(一)

姓名：_____

班別：_____ 日期：_____

我答對了：



0-4 題



5-8 題



9-12 題

算算看。

1

$$\begin{array}{r} 8237 \\ + 1450 \\ \hline 9687 \end{array}$$

2

$$\begin{array}{r} 1005 \\ + 3220 \\ \hline 4225 \end{array}$$

3

$$\begin{array}{r} 8812 \\ + \quad 86 \\ \hline 8898 \end{array}$$

4

$$\begin{array}{r} 6100 \\ + 1585 \\ \hline 7685 \end{array}$$

5

$$\begin{array}{r} 2161 \\ + 1382 \\ \hline 3543 \end{array}$$

6

$$\begin{array}{r} 4175 \\ + 1543 \\ \hline 5718 \end{array}$$

7

$$\begin{array}{r} 4021 \\ + \quad 581 \\ \hline 4602 \end{array}$$

8


$$\begin{array}{r} 2026 \\ + 5255 \\ \hline 7281 \end{array}$$

9


$$\begin{array}{r} 2454 \\ + 7472 \\ \hline 9926 \end{array}$$




買電器



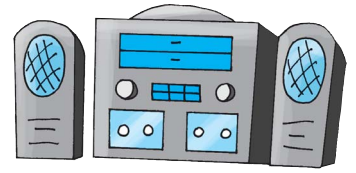
\$ 5230



\$ 2320



\$ 3408



\$?

列式計算下列各題。

- 10 買兩部電冰箱，需付多少元？

需付：

$$\begin{array}{r} \boxed{2320} \quad + \quad \boxed{2320} \\ \hline = \boxed{4640} \quad (\text{元}) \end{array}$$

$$\begin{array}{r} \boxed{2320} \\ + \quad \boxed{2320} \\ \hline \boxed{4640} \end{array}$$

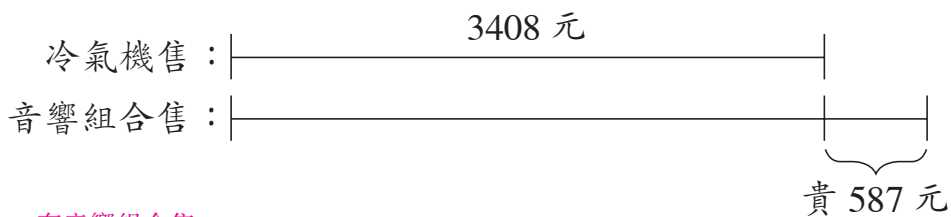
- 11 買電視機與冷氣機各一部，需付多少元？

需付：

$$\begin{array}{r} \underline{\hspace{10em}} \\ 5230 + 3408 \\ \hline = 8638 \quad (\text{元}) \end{array}$$

$$\begin{array}{r} \boxed{5230} \\ + \boxed{3408} \\ \hline \boxed{8638} \end{array}$$

- 12 一套音響組合比一部冷氣機貴 587 元，一套音響組合售多少元？



$$\begin{array}{r} \underline{\hspace{10em}} \\ \text{一套音響組合售：} \\ 3408 + 587 \\ \hline = 3995 \quad (\text{元}) \end{array}$$

$$\begin{array}{r} \boxed{3408} \\ + \boxed{587} \\ \hline \boxed{3995} \end{array}$$