

姓名：\_\_\_\_\_

班別：\_\_\_\_\_ 日期：\_\_\_\_\_

我答對了：



0-4 題



5-9 題



10-13 題


看圖填一填。

1




$3 \times 2 = \square$

2



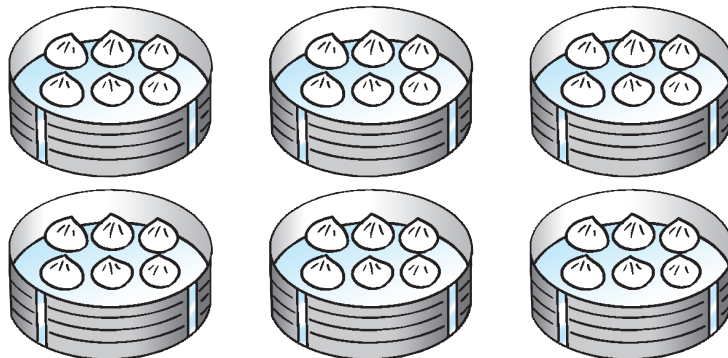
$3 \times 5 = \square$

3



$6 \times 3 = \square$

4



$6 \times 6 = \square$

算算看。

$$\begin{array}{r} 5 \quad 3 \\ \times 3 \\ \hline \square \end{array}$$

$$\begin{array}{r} 6 \quad 6 \\ \times 1 \\ \hline \square \end{array}$$

$$\begin{array}{r} 7 \quad 6 \\ \times 5 \\ \hline \square \end{array}$$

8  $3 \times 10 = \square$

9  $3 \times 7 = \square$

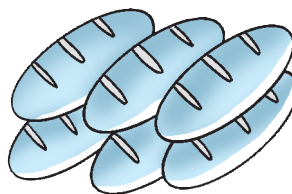
10  $6 \times 9 = \square$

列式計算下列各題。

- 11 一個麵包售 3 元，6 個麵包共售多少元？

共售：

$$\begin{array}{l} 3 \times \square \\ = \square \text{ (元)} \end{array}$$

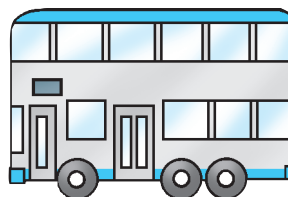


$$\begin{array}{r} \quad 3 \\ \times \square \\ \hline \square \end{array}$$

- 12 一輛巴士有 6 個車輪，4 輛巴士共有車輪多少個？

共有車輪：

$$\begin{array}{l} \square \bigcirc \square \\ = \square \text{ (個)} \end{array}$$



$$\begin{array}{r} \square \\ \bigcirc \square \\ \hline \square \end{array}$$

- 13 志光有 6 張貼紙，子欣有的是他的 10 倍，子欣有貼紙多少張？

---

---

---

