

姓名：_____

班別：_____ 日期：_____

我答對了：



0-3 題




4-6 題




7-9 題

看圖填一填。

1



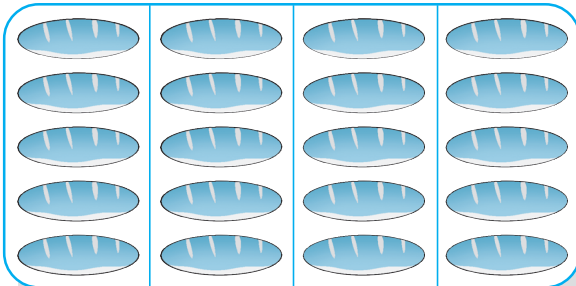
$2 \times 5 = \square$



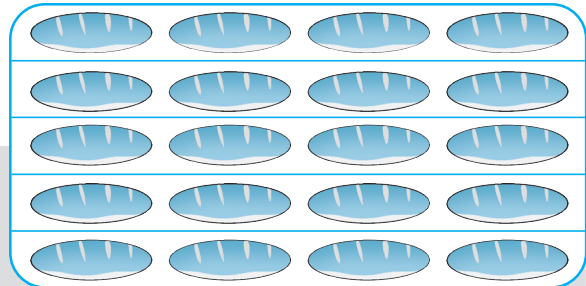
$5 \times 2 = \square$

$2 \times \square = 5 \times \square$

2



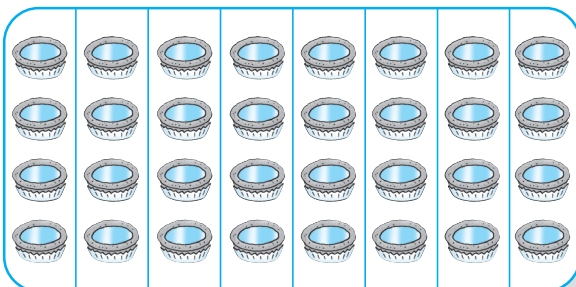
$5 \times 4 = \square$



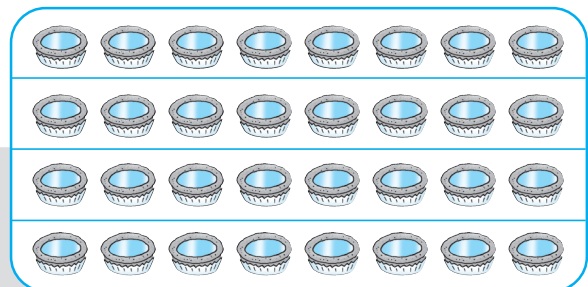
$4 \times 5 = \square$

$5 \times \square = 4 \times \square$

3



$4 \times 8 = \square$



$8 \times 4 = \square$

$4 \times \square = 8 \times \square$

填填看。

4 $7 \times 4 = 4 \times \square$
 $= \square$

5 $9 \times 5 = 5 \times \square$
 $= \square$

不用計算，把結果相同的連起來。

