

姓名：_____


班別：_____ 日期：_____


我答對了：

 0-3 題
  4-6 題
  7-8 題


看圖算一算。

1



還有 ^{蘋果}  : $14 - 6 =$

2

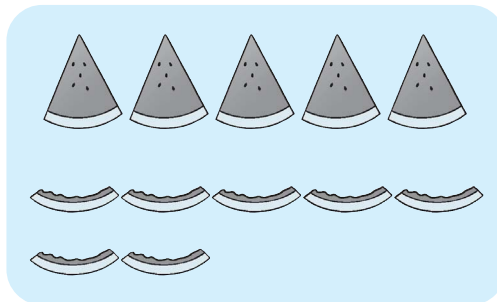


還有 ^魚  : $18 - 9 =$

3

還有 ^{西瓜}  :

$12 - 7 =$

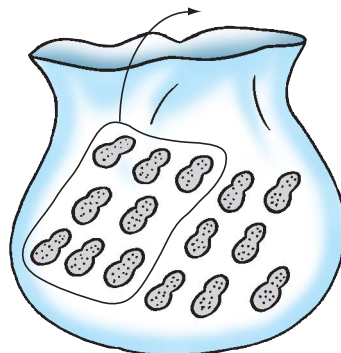


4




還有 ^{花生}  :

$15 - 8 =$




5



海豚 比 鯊魚 少 : $11 - 4 = \boxed{7}$

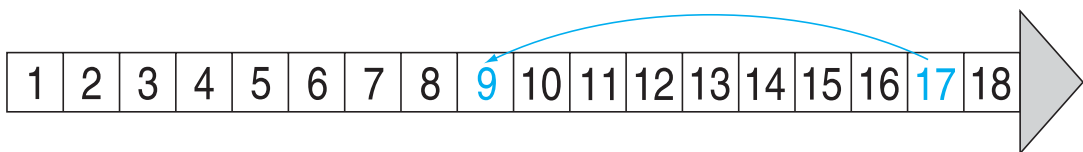
6



海馬 比 龍蝦 多 : $\boxed{13} - \boxed{5} = \boxed{8}$

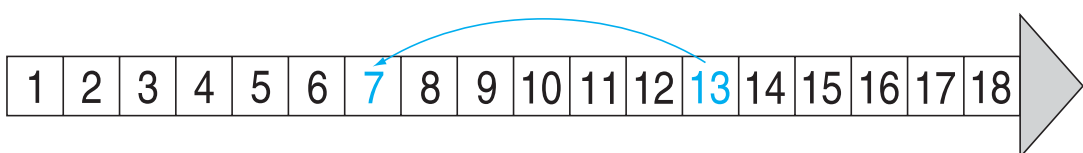
填填看。

7



$17 - \boxed{8} = \boxed{9}$

8



$\boxed{13} - \boxed{6} = \boxed{7}$