

13

除法(一)

姓名： _____

班別： _____ 日期： _____

我答對了：



0-4 題



5-9 題



10-13 題

算算看。

1
$$\begin{array}{r} \boxed{5} \\ 10 \overline{) 50} \\ \underline{50} \end{array}$$

2
$$\begin{array}{r} \boxed{3} \\ 20 \overline{) 60} \\ \underline{60} \end{array}$$

3
$$\begin{array}{r} \boxed{2} \\ 40 \overline{) 80} \\ \underline{80} \end{array}$$

4
$$\begin{array}{r} \boxed{3} \\ 10 \overline{) 35} \\ \underline{30} \\ \boxed{5} \end{array}$$

5
$$\begin{array}{r} \boxed{2} \\ 30 \overline{) 88} \\ \underline{60} \\ \boxed{28} \end{array}$$

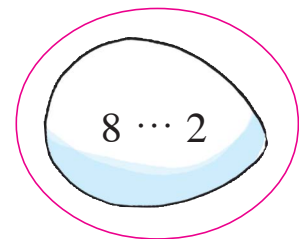

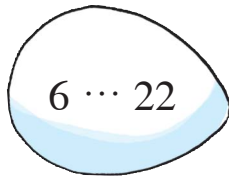
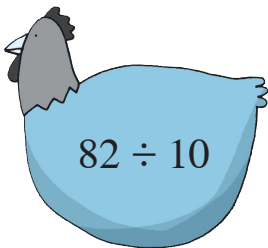
6
$$\begin{array}{r} \boxed{4} \\ 20 \overline{) 97} \\ \underline{80} \\ \boxed{17} \end{array}$$

7 $43 \div 10 = \boxed{4} \cdots \boxed{3}$


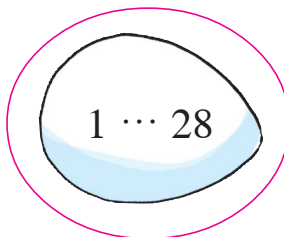

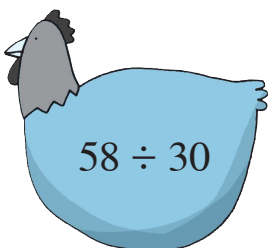
8 $70 \div 50 = \boxed{1} \cdots \boxed{20}$

把答案正確的雞蛋圈出來。

9



10



超級市場



列式計算下列各題。

- 11 一盒 10 枝裝的原子筆售 30 元，平均每枝原子筆售多少元？

平均每枝原子筆售：

$$\begin{array}{r} \boxed{30} \div \boxed{10} \\ = \boxed{3} \text{ (元)} \end{array}$$

$$\begin{array}{r} \boxed{3} \\ \boxed{10} \overline{) \boxed{30}} \\ \underline{\boxed{30}} \\ \boxed{30} \\ \underline{\boxed{30}} \end{array}$$

- 12 店員把 95 瓶蒸餾水裝成每 20 瓶一盒，共可裝成多少盒？餘下蒸餾水多少瓶？

共可裝成：

$$\begin{array}{r} 95 \div 20 \\ \hline = 4 \text{ (盒)} \cdots 15 \text{ (瓶)} \end{array}$$

$$\begin{array}{r} 4 \\ 20 \overline{) 95} \\ \underline{80} \\ 15 \end{array}$$

- 13 包裝一份曲奇禮盒需用 40 厘米彩帶。現有一條長 84 厘米的彩帶，共可包裝曲奇禮盒多少份？餘下彩帶多少厘米？

共可包裝曲奇禮盒：

$$\begin{array}{r} 84 \div 40 \\ \hline = 2 \text{ (份)} \cdots 4 \text{ (厘米)} \end{array}$$

$$\begin{array}{r} 2 \\ 40 \overline{) 84} \\ \underline{80} \\ 4 \end{array}$$