

姓名：_____

班別：_____ 日期：_____

我答對了：



0-4 題




5-8 題



9-12 題

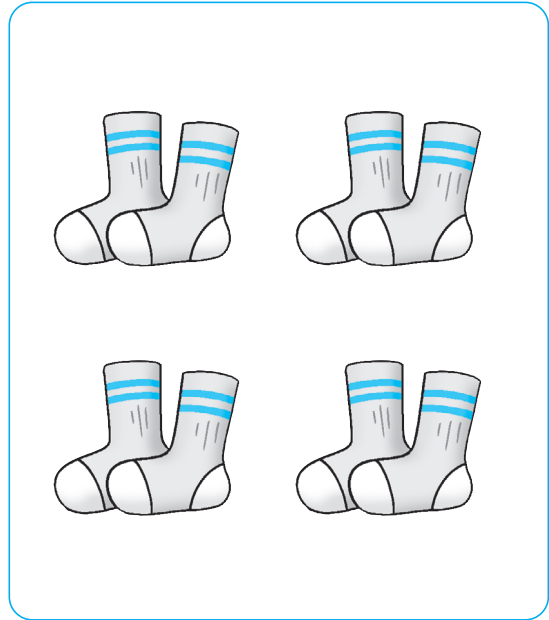
看圖填一填。

1




$2 \times 6 = \square$

2




$2 \times 4 = \square$

3



$2 \times 8 = \square$

4



$2 \times 3 = \square$

算算看。

5 $2 \times 1 = \square$

6 $2 \times 7 = \square$

7
$$\begin{array}{r} 2 \\ \times 3 \\ \hline \square \end{array}$$

8
$$\begin{array}{r} 2 \\ \times 2 \\ \hline \square \end{array}$$

9
$$\begin{array}{r} 2 \\ \times 9 \\ \hline \square \end{array}$$

列式計算下列各題。

- 10 一對皮鞋有 2 隻，5 對皮鞋共有多少隻？
共有：

$2 \times \square$
 $= \square$ (隻)



$$\begin{array}{r} 2 \\ \times \square \\ \hline \square \end{array}$$

- 11 一杯雪糕售 2 元，8 杯雪糕共售多少元？
共售：

$\square \bigcirc \square$
 $= \square$ (元)



$$\begin{array}{r} \square \\ \bigcirc \square \\ \hline \square \end{array}$$

- 12 一包雞肉腸有 2 條，小芳買 10 包共有多少條？

