

姓名： _____

班別： _____ 日期： _____

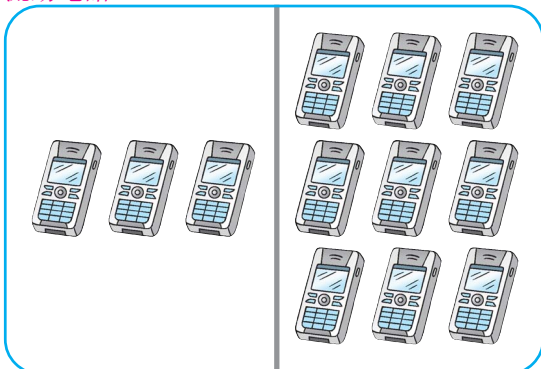
我答對了：

0-3 題 4-7 題 8-10 題

填填看。

流動電話


1



$$3 + \boxed{9} = \boxed{12}$$

電風扇

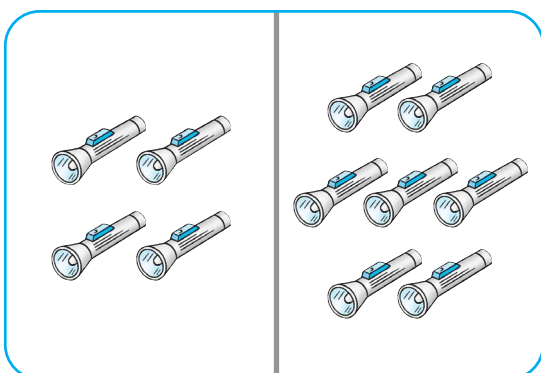
2



$$12 - \boxed{5} = \boxed{7}$$

電筒


3



$$4 + \boxed{7} = \boxed{11}$$

攪拌機

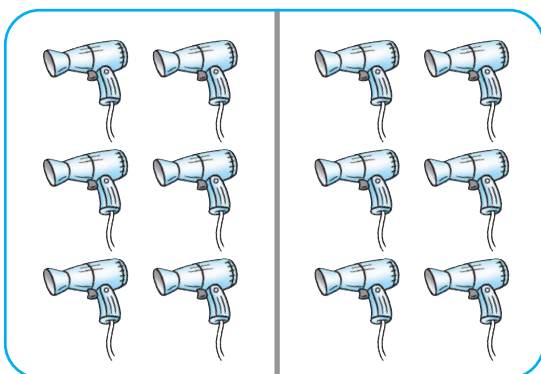
4



$$11 - \boxed{6} = \boxed{5}$$

風筒

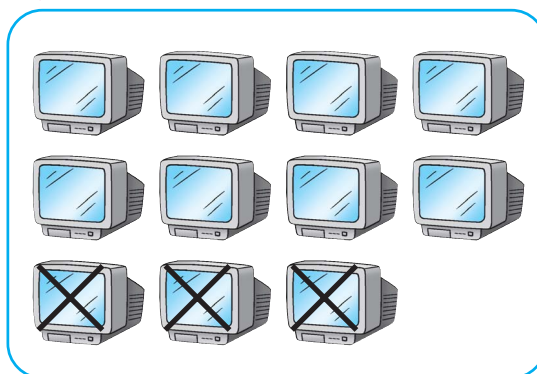
5



$$6 + \boxed{6} = \boxed{12}$$

電視機

6



$$11 - \boxed{3} = \boxed{8}$$

把正確的基本組合圈出來。

7

$$5 + 6 = 11$$

$$7 + 5 = 11$$

$$6 + 6 = 11$$

8

$$4 + 7 = 12$$

$$9 + 3 = 12$$

$$8 + 3 = 12$$

9

$$11 - 3 = 6$$

$$11 - 7 = 5$$

$$11 - 8 = 3$$

10

$$12 - 4 = 3$$

$$12 - 5 = 7$$

$$12 - 9 = 4$$