

姓名：_____

班別：_____ 日期：_____

我答對了：



0-4 題



5-9 題



10-13 題

算算看。

$$\begin{array}{r} \square \\ 10 \overline{) 50} \\ \square \\ \hline \end{array}$$

$$\begin{array}{r} \square \\ 20 \overline{) 60} \\ \square \\ \hline \end{array}$$

$$\begin{array}{r} \square \\ 40 \overline{) 80} \\ \square \\ \hline \end{array}$$

$$\begin{array}{r} \square \\ 10 \overline{) 35} \\ \square \\ \hline \square \end{array}$$

$$\begin{array}{r} \square \\ 30 \overline{) 88} \\ \square \\ \hline \square \end{array}$$

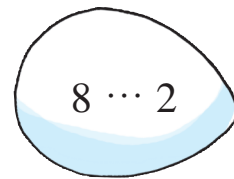
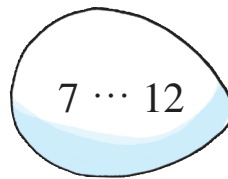
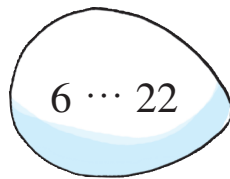
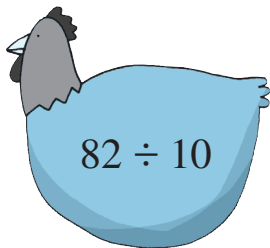
$$\begin{array}{r} \square \\ 20 \overline{) 97} \\ \square \\ \hline \square \end{array}$$

$$7 \quad 43 \div 10 = \square \cdots \square$$


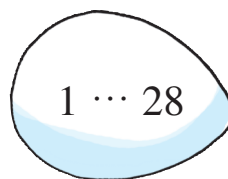


$$8 \quad 70 \div 50 = \square \cdots \square$$

把答案正確的雞蛋圈出來。

9



10



超級市場

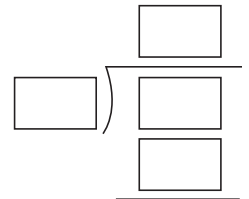


列式計算下列各題。

- 11 一盒 10 枝裝的原子筆售 30 元，平均每枝原子筆售多少元？


平均每枝原子筆售：

$$\begin{array}{l} \square \div \square \\ = \square \text{ (元)} \end{array}$$



- 12 店員把 95 瓶蒸餾水裝成每 20 瓶一盒，共可裝成多少盒？餘下蒸餾水多少瓶？

共可裝成：



- 13 包裝一份曲奇禮盒需用 40 厘米彩帶。現有一條長 84 厘米的彩帶，共可包裝曲奇禮盒多少份？餘下彩帶多少厘米？

