

姓名：_____

班別：_____ 日期：_____

我答對了：



0-5 題



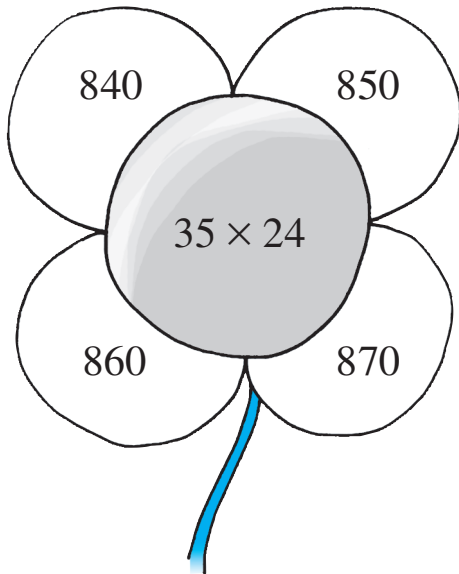
6-10 題



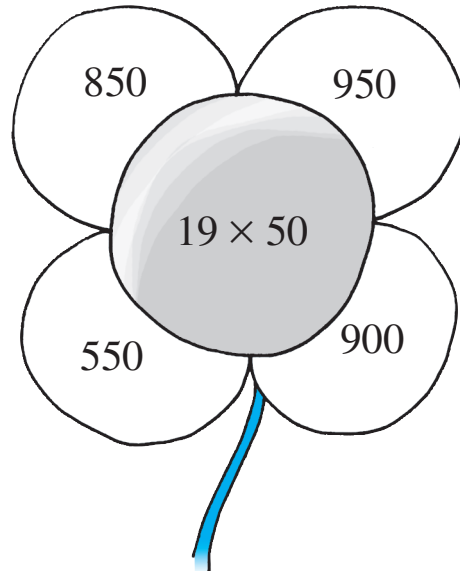
11-14 題

計算下列各題，把答案正確的花瓣填上顏色。

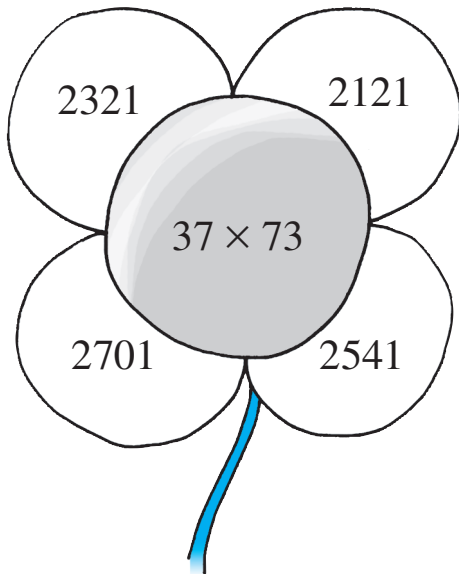
1



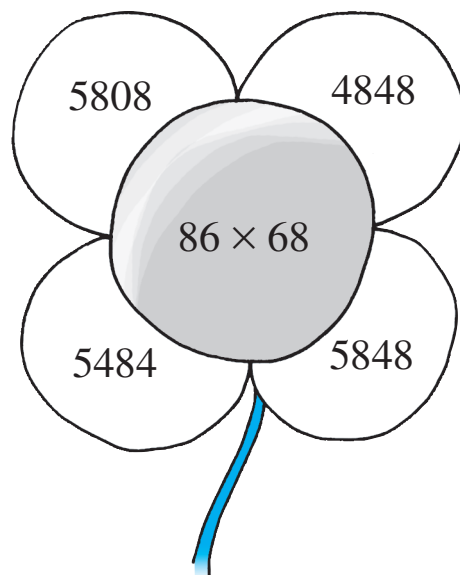
2



3



4



算算看。

5 $22 \times 30 = \square$

6 $40 \times 15 = \square$

7 $25 \times 38 = \square$

8 $11 \times 37 = \square$

9
$$\begin{array}{r} 50 \\ \times 60 \\ \hline \square \end{array}$$

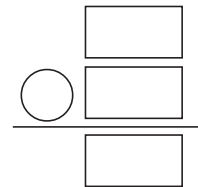
10
$$\begin{array}{r} 34 \\ \times 26 \\ \hline \square \\ \square \\ \hline \square \end{array}$$

11
$$\begin{array}{r} 97 \\ \times 63 \\ \hline \square \\ \square \\ \hline \square \end{array}$$


列式計算下列各題。

- 12 每盒喉糖有 12 粒，50 盒共有多少粒？
共有：

$\square \times \square$
 $= \square$ (粒)



- 13 牙醫每天可診治 32 名病人，28 天內可診治病
人多少名？
可診治病人：



- 14 午餐每份售 24 元，昨天售出 89 份午餐，共得
多少元？

