

8

基本減法

姓名：_____

班別：_____ 日期：_____

我答對了：



0-5 題



6-10 題



11-14 題

填填看。

1 5 取去 1 還有 _____

5 減 1 等於 _____

$5 - 1 = \square$

2 7 取去 6 還有 _____

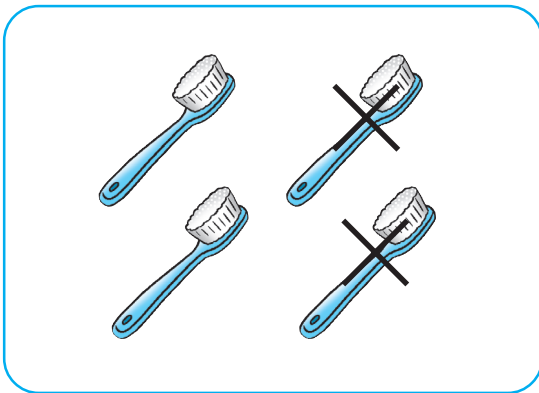
7 _____ 6 等於 _____

$7 \bigcirc 6 \bigcirc \square$

3 - 是 _____ 號


看圖算一算。

4



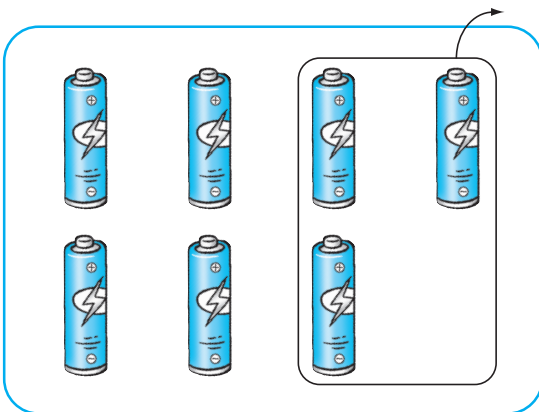
$4 - 2 = \square$

5




$8 - 5 = \square$

6



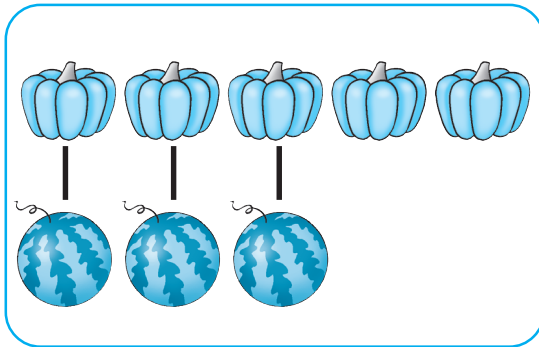
$7 - 3 = \square$

7



$10 - 7 = \square$

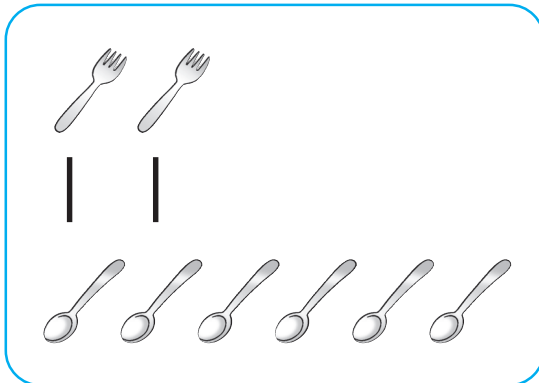
8



🍷 比 🍈 多 _____

$$5 - 3 = \square$$

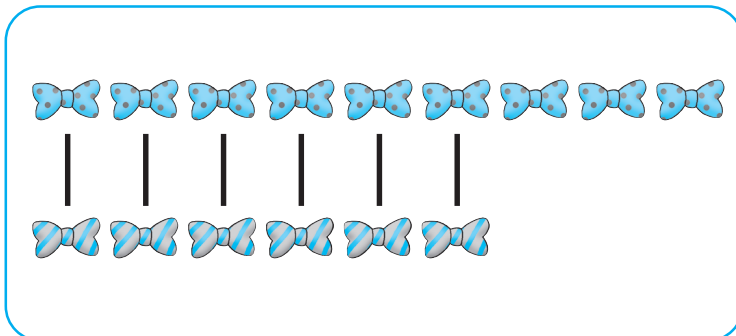
9



🍴 比 🍵 少 _____

$$6 - 2 = \square$$

10



🎀 比 🎀 _____

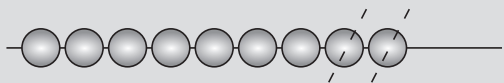
(多 / 少) _____

$$9 - 6 = \square$$

算算看，可劃去 ● 幫助計算。

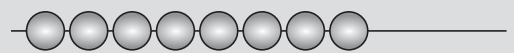
11

$$9 - 2 = \square$$



12

$$8 - 4 = \square$$



13

$$6 - 5 = \square$$



14

$$10 - 8 = \square$$

