

7

基本加法

姓名：_____

班別：_____ 日期：_____

我答對了：



0-5 題



6-11 題



12-16 題

填填看。

1 5 和 5 是 10
5 加 5 等於 10

$$5 + 5 = \boxed{10}$$

2 3 和 6 是 9
3 加 6 等於 9

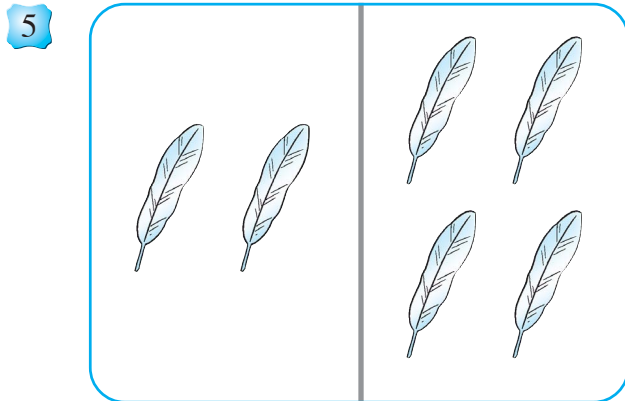
$$3 \text{ (in circle)} + 6 \text{ (in circle)} = \boxed{9}$$

3 + 是 加 號

4 = 是 等 號


看圖算一算。

羽毛




$$2 + 4 = \boxed{6}$$


葉子



$$7 + 1 = \boxed{8}$$




$$8 + 2 = \boxed{10}$$




$$4 + 3 = \boxed{7}$$

算算看。


9




10




11




12









13




14




15 把結果是 7 的  填上顏色。



✓ 表示填色

16 把結果是 9 的  填上顏色。



✓ 表示填色