

## 7

## 基本加法

姓名：\_\_\_\_\_

班別：\_\_\_\_\_ 日期：\_\_\_\_\_

我答對了：



0-5 題



6-11 題



12-16 題

填填看。

1 5 和 5 是 \_\_\_\_\_  
5 加 5 等於 \_\_\_\_\_

$$5 + 5 = \square$$

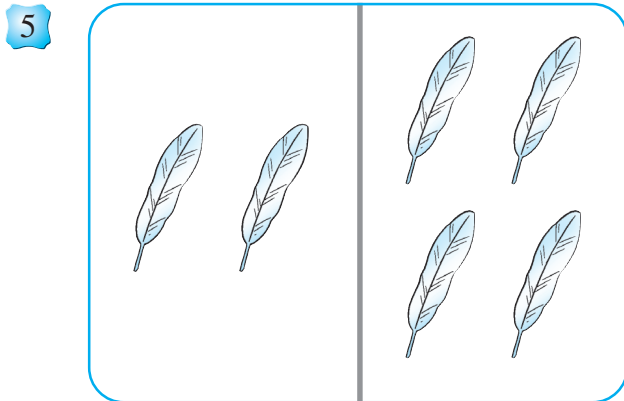
2 3 和 6 是 \_\_\_\_\_  
3 \_\_\_\_\_ 6 等於 \_\_\_\_\_

$$3 \bigcirc 6 \bigcirc \square$$

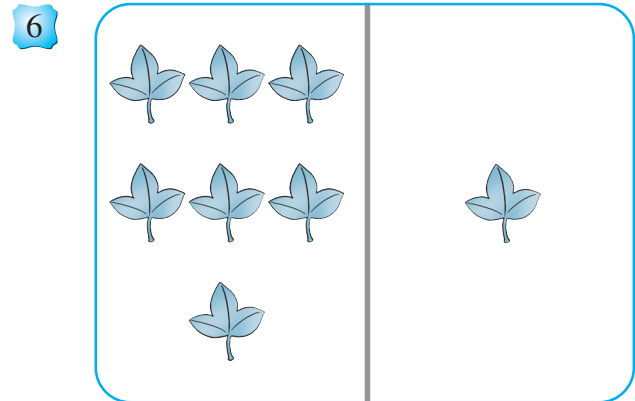
3 + 是 \_\_\_\_\_ 號

4 = 是 \_\_\_\_\_ 號


看圖算一算。




$$2 + 4 = \square$$



$$7 + 1 = \square$$




$$8 + 2 = \square$$




$$4 + 3 = \square$$

算算看。


9




10




11




12









13



14



15 把結果是 7 的  填上顏色。



16 把結果是 9 的  填上顏色。

