

## 8

## 基本減法

姓名：\_\_\_\_\_

班別：\_\_\_\_\_ 日期：\_\_\_\_\_

我答對了：



0-5 題



6-10 題



11-14 題

填填看。

1 5 取去 1 還有 4

5 減 1 等於 4

$5 - 1 = \boxed{4}$

2 7 取去 6 還有 1

7 減 6 等於 1

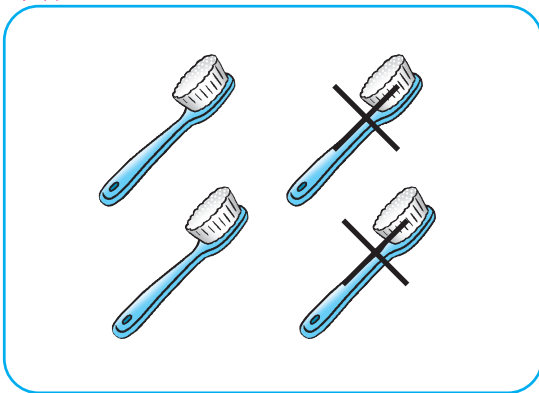
$7 - 6 = \boxed{1}$

3 - 是 減 號

看圖算一算。

牙刷


4



$4 - 2 = \boxed{2}$

火柴

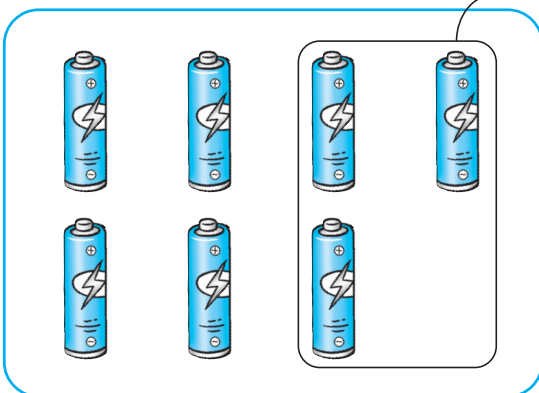
5



$8 - 5 = \boxed{3}$

電池

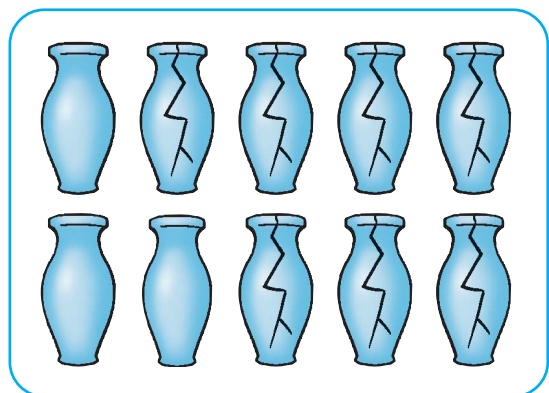
6



$7 - 3 = \boxed{4}$

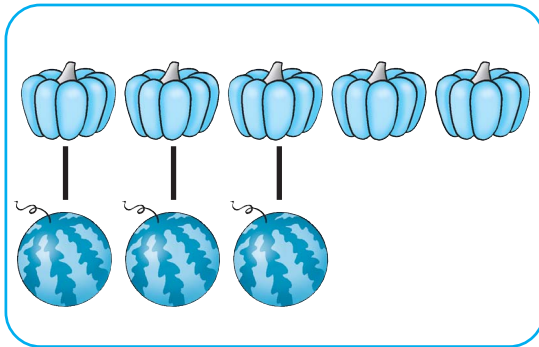
花瓶

7



$10 - 7 = \boxed{3}$

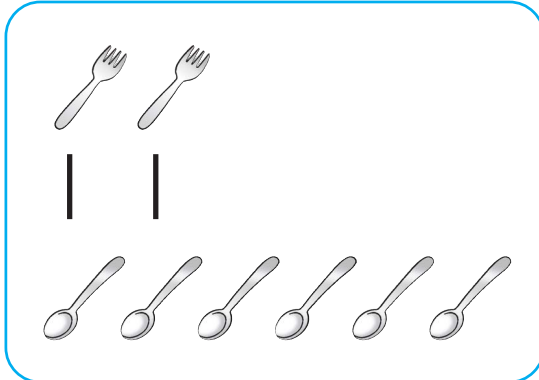
8



南瓜 比 西瓜 多 2

$$5 - 3 = \boxed{2}$$

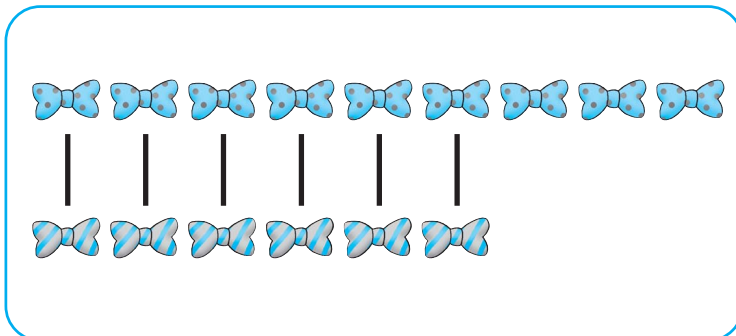
9



叉 比 匙 少 4

$$6 - 2 = \boxed{4}$$

10



優 比 劣

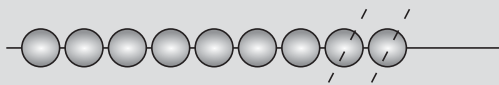
( 多 / 少 ) 3

$$9 - 6 = \boxed{3}$$

算算看，可劃去 ● 幫助計算。

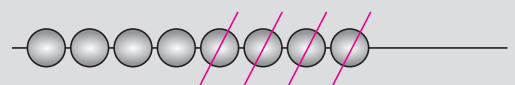
11

$$9 - 2 = \boxed{7}$$



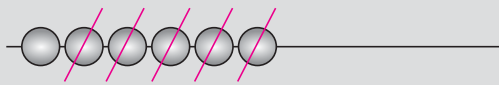
12

$$8 - 4 = \boxed{4}$$



13

$$6 - 5 = \boxed{1}$$



14

$$10 - 8 = \boxed{2}$$

